

Name _____

Class 4/ _____

WEEKLY REVIEW WEEK 1 STRUCTURES AND FUNCTIONS OF PLANTS

QUESTION 1 – MULTIPLE CHOICE

What are the basic needs of plants? – Select all that apply

A Air

B Shelter

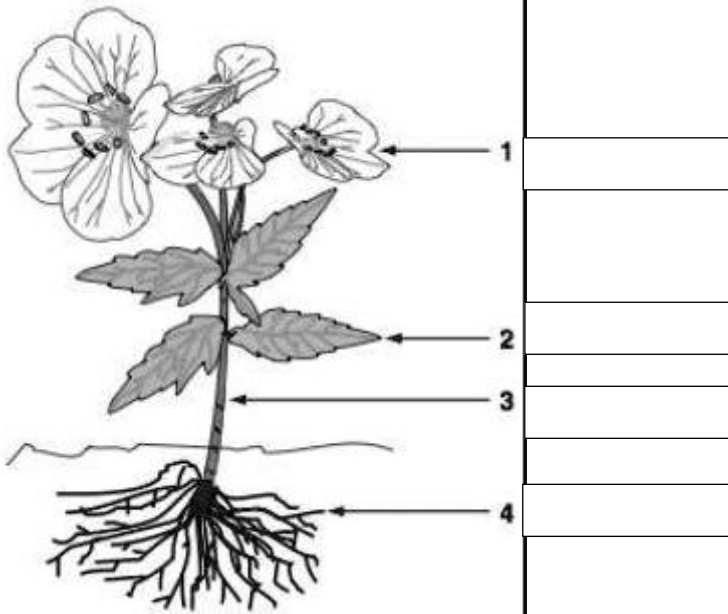
C Sugar

D Water


E space

QUESTION 2 SHORT ANSWER

Label the flower parts from 1-4



What is the function of part number 4? How does it help the plant?



The two plants shown here are ferns and palm trees.

What is the difference between these two plants?

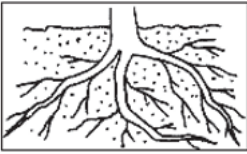
Name _____

Class 4/ _____

WEEKLY REVIEW WEEK 2 STRUCTURES AND FUNCTIONS OF PLANTS

QUESTION 1 – MULTIPLE CHOICE

A) roots




C) leaves



B) stems




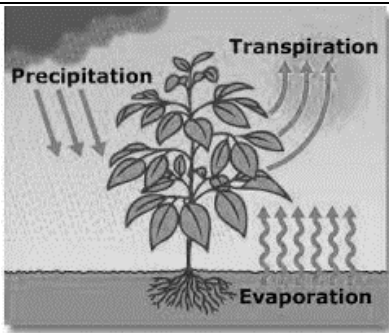
D) flowers



Which part of the plant makes most of the plant's food?

QUESTION 2 SHORT ANSWER

What is transpiration?



In what number are egg cells made?

LABEL THE PARTS 1-4

1 _____

2 _____

3 _____

4 _____