

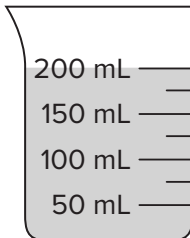
Lesson 12-1

Exit Ticket

Name _____

What is the liquid volume in the container?

1.



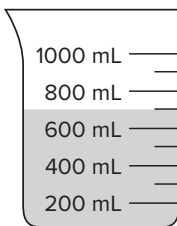
A. 20 mL

B. 200 mL

C. 2 L

D. 200 L

2.



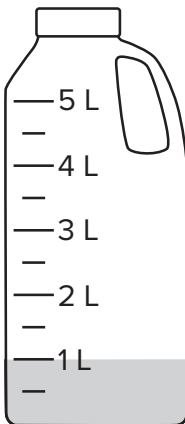
A. 600 mL

B. 650 mL

C. 700 mL

D. 750 mL

3.



A. 1 L

B. 2 L

C. 50 L

D. 100 L

Reflect On Your Learning

I'm
confused.

I'm still
learning.

I understand.

I can teach
someone else.




Exit Ticket

Name _____


Which is the best estimate for the liquid volume of the object?

1. mug of coffee



- A. 3 liters
B. 32 liters
C. 32 millimeters
D. 320 milliliters

2. tea kettle full of water



- A. 2 milliliters
B. 25 milliliters
C. 2 liters
D. 25 liters

3. One bowl contains 235 milliliters of milk. Another bowl contains 470 milliliters of milk. What is the combined liquid volume of the two bowls?

Reflect On Your Learning

I'm
confused.

I'm still
learning.

I understand.

I can teach
someone else.




Lesson 12-3

Exit Ticket

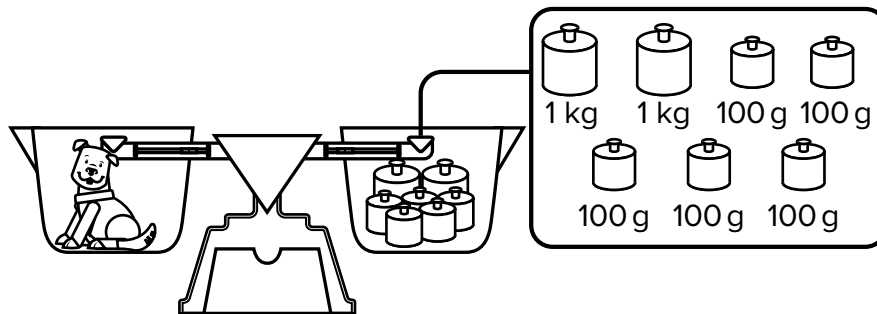
Name _____

1. What is the mass of the light bulb?



_____ grams

2. What is the mass of the puppy?



_____ kilograms and _____ grams

3. A horse and a foal have a combined mass of 695 kilograms. If the horse has a mass of 480 kilograms, what is the mass of the foal?

Reflect On Your Learning

I'm
confused.

I'm still
learning.

I understand.

I can teach
someone else.




Exit Ticket

Name _____


Which is the best estimate for the mass of the object?

1. fox



- | | |
|--------------------|------------------------|
| A. 9 grams | B. 9 kilograms |
| C. 90 grams | D. 90 kilograms |

2. bumblebee



- | | |
|----------------------|-----------------------|
| A. 1 gram | B. 50 grams |
| C. 1 kilogram | D. 5 kilograms |

3. A lunch box and food have a combined mass of 945 grams. The empty lunch box has a mass of 680 grams. What is the mass of the food?

- | | |
|-----------------------|-----------------------|
| A. 1,625 grams | B. 1,523 grams |
| C. 345 grams | D. 265 grams |

Reflect On Your Learning

I'm
confused.

I'm still
learning.

I understand.

I can teach
someone else.




Lesson 12-5

Exit Ticket


Name _____

1. The clock shows the time Emma eats lunch.
What time is shown?

- A. 3:06 B. 1:17
C. 1:05 D. 1:20



2. What time is shown on the clock?



3. Which are different ways you can say the time shown on the clock? Choose all that apply.



- A. eight two D. twenty minutes till eight
B. eight twenty-two E. twenty-two minutes till eight
C. two minutes past eight F. twenty-two minutes past eight

Reflect On Your Learning

I'm
confused.

I'm still
learning.

I understand.

I can teach
someone else.

