



وزارة التربية والتعليم  
Ministry of Education

روضة ومدرسة السعادة  
**Al Saada School C1& KG**



مؤسسة الإمارات للتعليم المدرسي  
EMIRATES SCHOOLS ESTABLISHMENT

**GRADE**

**3**

**Mathematics**

**Quiz 1**

**TERM 3 -2023/2024**

**Student Name**

**Class**

3

**GRADE**

**20**

**Teachers Name:**

**Sign:**

**PART A**- 10 Multiple Choice questions and writing. Each question equals 3 marks. Circle the letter corresponding to the correct answer, show your work!

Question	1	
----------	---	--

Solve the equation and circle the correct answer.

$$4 \times 3 \times 2 = ?$$

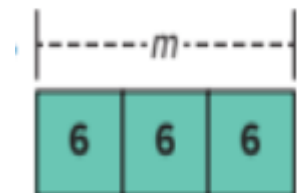
$$\begin{array}{c} \underline{\quad} \times \underline{\quad} \times \underline{\quad} = ? \\ \swarrow \quad \searrow \\ \underline{\quad} \times \underline{\quad} \\ \swarrow \quad \searrow \\ \underline{\quad} \end{array}$$

$$\begin{array}{c} \underline{\quad} \times \underline{\quad} \times \underline{\quad} = ? \\ \swarrow \quad \searrow \\ \underline{\quad} \times \underline{\quad} \\ \swarrow \quad \searrow \\ \underline{\quad} \end{array}$$

A		24
B		18
C		14
D		42

Question	2	
----------	---	--

The letter 'm' represents what number?  
Complete the equation to show how you got to the answer.




A		5
B		3
C		18
D		21

Question

3

Circle the correct equation for the bar graph.



A  $3 \times 3 = 9$

B  $4 \times 4 = 16$

C  $3 \times 8 = 24$

D  $3 \times 2 = 6$

Question

4

Ava shares 42 stickers evenly among 6 friends. Then she gives each friend 4 more stickers. How many stickers does each friend receive?

Show your work.

A 11

B 21

C 55

D 31

Question

5

The \_\_\_\_\_ is the answer to a multiplication equation.

A product

B factor

C pattern

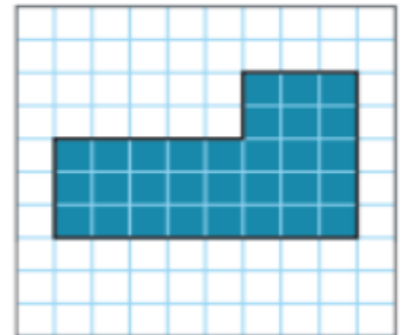
D unknown

Question

6

What is the perimeter of the figure?

Write an equation to measure the distance of the perimeter.



$$\_ + \_ + \_ + \_ + \_ + \_ = \_ \text{ m}$$

A 14 meters

B 26 meters

C 15 meters

D 21 meters

Question

7

What is the perimeter of the figure?  
Show your equation and circle the answer.



A 15m

B 10m

C 20 m

D 25m

Question

8

The receipt shows how much Amna paid for diving equipment.  
How much money did Amna spend on diving equipment if she purchased 2 of each? Show your work and circle the correct answer.

Equipment	Cost
batteries	\$4
mouth pieces	\$5
hoods for wet suit	\$7

A \$40

B \$60

C \$50

D \$32

Question

9

How can you use doubling to multiply by 4?

Show your work and circle the correct answer.

A

$4 \times 4 = 16$

B

$4 \times 2 = 8$

C

$1 \times 4 = 4$

D

$0 \times 4 = 0$

Question

10

Complete the facts equation that represents, an array of 2 and 4 ,then circle the correct answer.



$$\underline{\quad} \times 2 = \underline{\quad}$$
$$\underline{\quad} \times 4 = \underline{\quad}$$

A

$10 \times 2 = 20 \text{ and } 5 \times 4 = 20$

B

$5 \times 2 = 10 \text{ and } 4 \times 2 = 8$

C

$2 \times 2 = 4 \text{ and } 2 \times 2 = 4$

D

$4 \times 2 = 8 \text{ and } 2 \times 4 = 8$

-

- - - - -

- - - - -

- - - - -

- - - - -

- -

-

-

-

-

- - - - -

- - -

- - - -

- - - - -



-

-

-

-

-

-

- -

- -