



Q1 :: But a Circle around the correct answer:

... / 3

1) How could you take apart $15 + 35$ to find the sum :

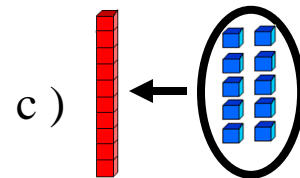
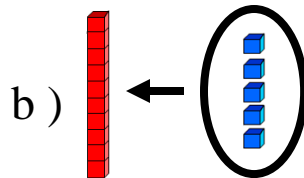
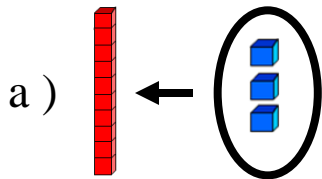


a) $15 + 5 + 30$

b) $14 + 4 + 40$

c) $12 + 2 + 20$

2) Regroup :



3) There are 41 people in the park . 9 more people come into the park .
How many people are in the park now ??

a) 49

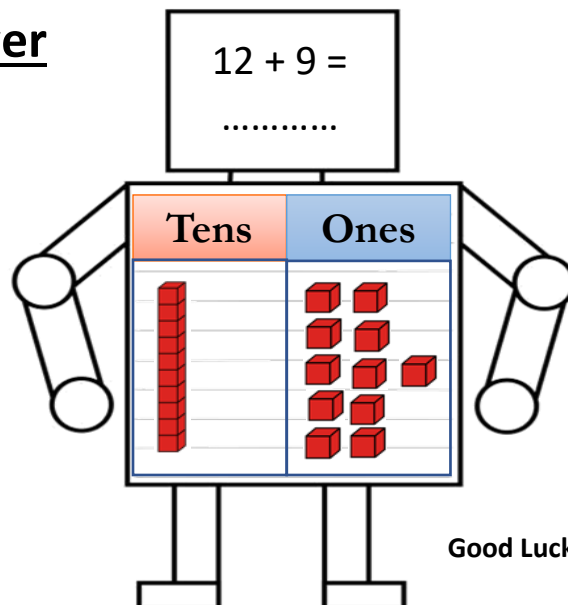
b) 50

c) 51

Q2 :: Circle the ones to show regrouping ten ones as 1 ten .

Draw your answer


... / 2




Q3 :: Rewrite the problem . Add .

... / 3

$$37 + 47 = \dots\dots\dots$$



$$12 + 11 = \dots\dots\dots$$



Q4 :: problem Solving.

... / 2

Nora made 16 points in her basketball game .
Maryam made 24 points and Manar made 22 .
What was their final score ?



	○		○		○	
--	---	--	---	--	---	--