

Al Wagan School
Grade: 1 Science Test: 1

25

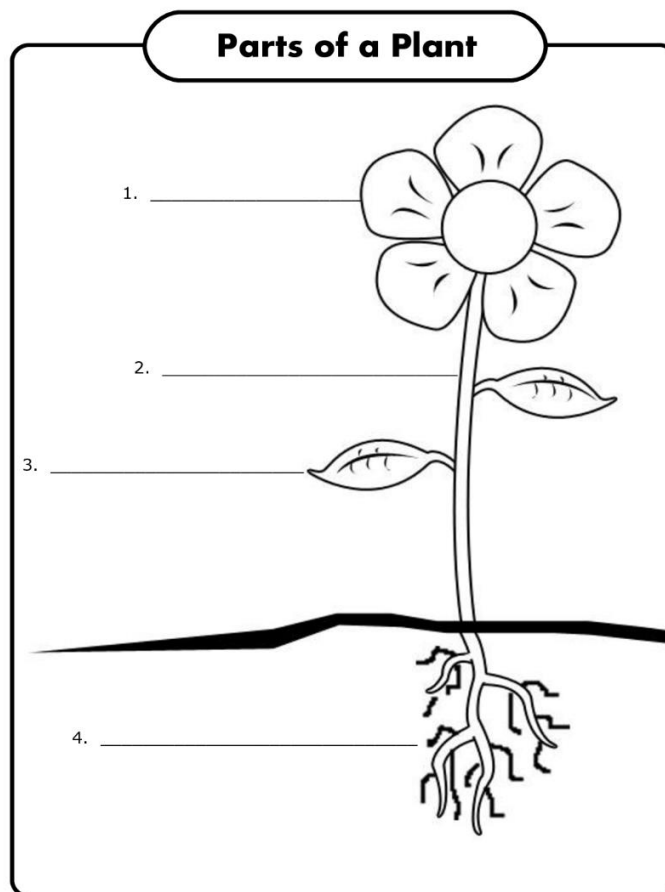
Name: _____

Grade: 1 _____

1. Use the words below and label the plant Structure. (8)

roots	stem	leaf	flower
-------	------	------	--------

Name: _____



2. Place the given words in the correct spaces. (10)

Sun

air

water

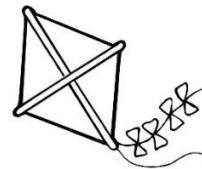

soil

plant

Name: _____

What Plants Need to Grow

3. a. Circle the non-living objects/ things. (4)



b. Circle the living organisms.



4. Draw 2 living and 2 non-living things. (2)

Living	Non-living

5. Circle thereafter write the correct answer. (1)

The _____ keep the plant in the ground, and takes in water and nutrients from the soil.

- a. stem
- b. roots
- c. leaf

Good Luck 😊