
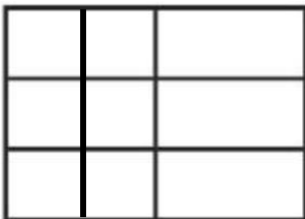




G3	Mathematics	Arb translation	Arb translation
----	-------------	-----------------	-----------------


Student Name			
Quiz 1			
G 3	Mathematics		2023-2024
Student Mark		30	

Circle the letter corresponding to the correct answer	ضع دائرة حول الحرف المقابل للإجابة الصحيحة
---	--

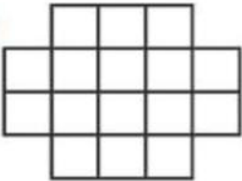
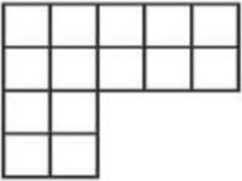
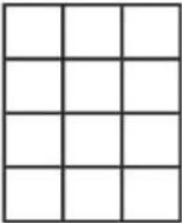



Question	1	
Which figure is tiled correctly to find area?	ما الشكل الذي تم تغطيته بشكل صحيح للعثور على المساحة؟	
<p>A. </p> <p>B. </p> <p>C. </p> <p>D. </p>		

Question	2	
----------	---	--


What is the area of the figure ? Draw to complete the tilling	ما هي مساحة الشكل؟ ارسم لإكمال المربعات
---	---





A	8 square units
B	15 square units
C	18 square units
D	20 square units

G3	Mathematics	Arb translation	Arb translation
Question	3		
Which figure has an area of 16 square units ?		ما الشكل الذي تبلغ مساحته 16 وحدة مربعة؟	
<div><div><div>A.</div></div><div><div>B.</div></div><div><div>C.</div></div><div><div>D.</div></div></div>			
Question	4		
What is the area of square?		ما مساحة الشكل المربع؟	
<div><div><div>A.</div><div>10square centimeters</div></div><div><div>B.</div><div>20 square centimeters</div></div><div><div>C.</div><div>25 square centimeters</div></div><div><div>D.</div><div>30 square centimeters</div></div></div> <div></div>			
Question	5		
Look at the tiled figure . What is the area of the figure in square units?		انظر إلى الشكل المربعات. ما مساحة الشكل حدات مربعة؟	
<div><div><div>A.</div><div>8 square units</div></div><div><div>B.</div><div>9 square units</div></div><div><div>C.</div><div>10 square units</div></div><div><div>D.</div><div>11 square units</div></div></div> <div></div>			

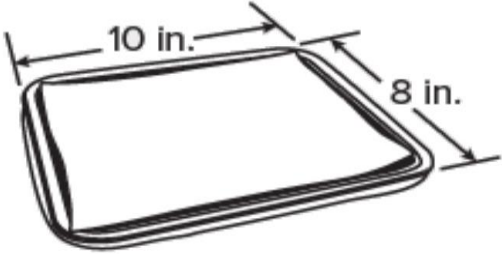
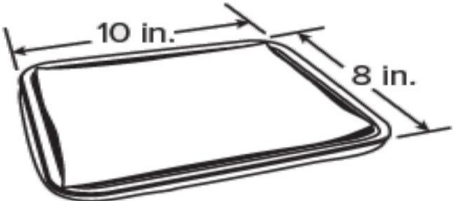
G3	Mathematics	Arb translation	Arb translation
----	-------------	-----------------	-----------------

QuestionA		6	
Which equations can be used to determine the area of the rectangle?			
A	<input type="checkbox"/>	$5 + 10 + 5 + 5 = ?$	
B	<input type="checkbox"/>	$5 \times 10 \times 5 \times 5 = ?$	
C	<input type="checkbox"/>	$5 \times 1 + 5 \times 5 = ?$	
D	<input type="checkbox"/>	$5 \times 10 + 5 \times 5 = ?$	

Question		7	
What is the area of the painting ?		<p>ما هي مساحة اللوحة؟</p> 	
A	<input type="checkbox"/>	10 square feet	
B	<input type="checkbox"/>	12 square feet	
C	<input type="checkbox"/>	15 square feet	
D	<input type="checkbox"/>	18 square feet	

Question		8	
What is the area of the figure ?		<p>ما هي مساحة الشكل ؟</p> 	
A	<input type="checkbox"/>	10 square meters	
B	<input type="checkbox"/>	11 square meters	
C	<input type="checkbox"/>	12 square meters	
D	<input type="checkbox"/>	13 square meters	

G3	Mathematics	Arb translation	Arb translation
----	-------------	-----------------	-----------------

Working Out Question		
Question	9	
<p>Solve and show your work: Look at the baking sheet .</p>  <p>What is the area of the baking sheet ?</p>	<p>حل وعرض عملك . انظر إلى ورقة الخبز.</p>  <p>ما هي مساحة ورقة الخبز؟</p>	

Working Out Question		
Question	10	
<p>Solve and show your work: What is the area of the composite figure ?</p>	<p>حل وإظهار عملك: ما هي مساحة الشكل المركب؟</p> 