



Q1 Fill in the blanks

Matter - Volume - Physical property - Chemical property-mass

- 1- The amount of space an object takes up
- 2- Anything that has mass and takes up space.
- 3- is a characteristic that can be observed and measured.....
- 4-characteristic that can be observed when there is change in matter
- 5- Measure the amount of matter in an object.

Chemical or Physical:

Color, shape, texture, and luster are all examples of _____ properties of matter.

Q2)Choose the correct answer.

1 – Anything that has mass and takes up space

- A- Mass B -matter C -volume D- property

2-Which property measures the space taken up by object?

- A- Mass B -matter C -volume D- physical property

3- Which would have the less mass?



4-Which pictures shows chemical properties :



A

B

C

D

5-Who has more mass girl or boy ? Why ? :

- A. girl because she has more matter.
- B. girl because she has more space.
- C. Boy because he has more of matter
- D. Not of above.



6-The pot which use to cook food made of aluminum because it is

- A- Conductor
- B-Shiny
- C - Reflective
- D- Blend




7-How much one substance can dissolve into another substance

- A-Evaporation
- B volume
- C- Solubility
- D- conductivity







8-What is the term for the amount of space something takes up?





- A-Matter
- B-mass
- C-Volume



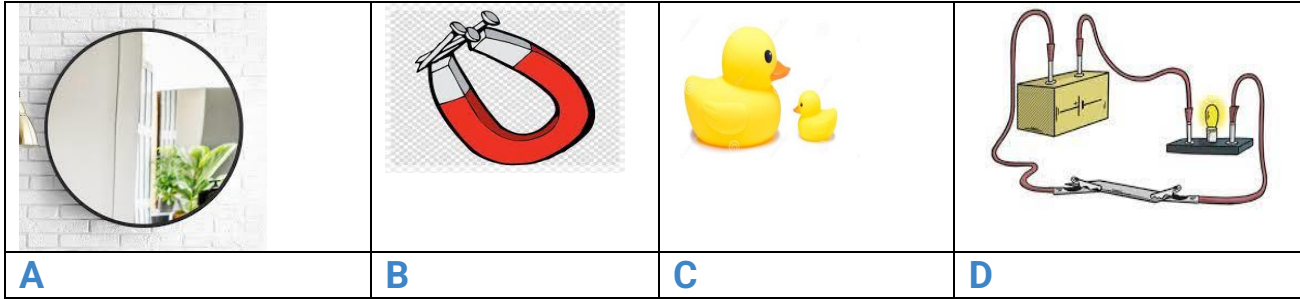
9-Choose the picture that shows reflectivity

			
A	B	C	D-

10- Choose the picture that shows magnetism

			
A	B	C	D

11- Choose the picture that shows conductivity.



Writing question : يرجى تدريب الطالبات جيدا على إجابة هذا السؤال (تدريب كتابي)

Who has more mass girl or boy? Why? :



Answer :

- the boy has more mass because he has more matter.

إعادة الكتابة في الفراغ التالي

<p>-----</p> <p>-----</p>

Teacher : Maysoon Ali Al Taweel