

Answer Key with Questions

Lesson Check: Motion

1) Fill in the blanks using the available answer choices.

Words such as *above* and *below* describe an object's _____.
(Blank 1)

Blank 1 options

- speed
- position

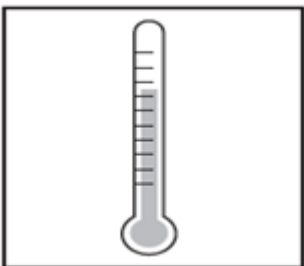
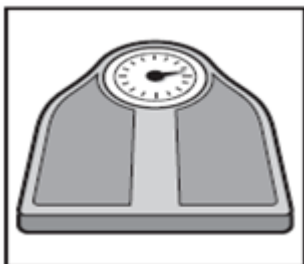
Correct Answer

position

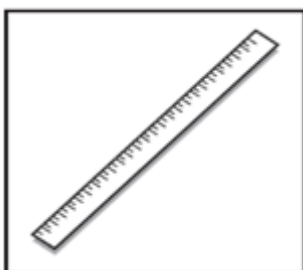
Answer Key with Questions

Lesson Check: Motion

2) Which object can be used to measure distance?



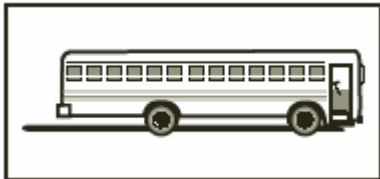
Correct Answer



Answer Key with Questions

Lesson Check: Motion

3) A bus traveled 35 kilometers in one hour. Which is the speed of the bus?



- 70 kilometers per hour
- 35 kilometers per hour
- 25 kilometers per hour
- 10 kilometers per hour

Correct Answer

35 kilometers per hour

4) Describe how to find the speed of an object in motion.

Correct Answer

Answers may vary.

Explanation

Answer Key with Questions

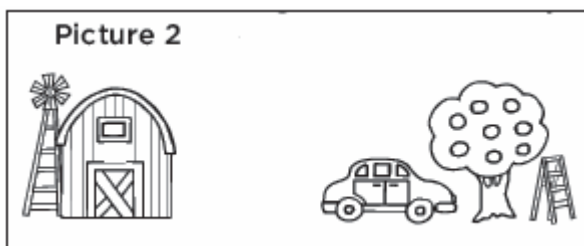
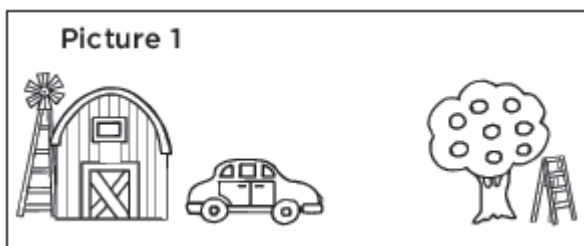
Lesson Check: Motion

5) The words *forward* and *backward* describe an object's _____.

Correct Answer

Blank 1: direction

6) Which is the new position of the car in picture 2?



- near the barn
- far from the tree
- near the tree
- in the barn

Correct Answer

near the tree

Answer Key with Questions

Lesson Check: Motion

7) A marble has to roll down a ramp and then travel a distance of 3 m. The ramp's height is supported by 4 books. When the marble rolls down, it travels only 2 meters. How can the ramp be modified to increase the distance the marble travels?

Correct Answer

Answers may vary.

Explanation

8) Fill in the blanks using the available answer choices.

_____ is the space between two objects and can be measured using a tape
(Blank 1)
measure.

Blank 1 options

- Distance
- Direction

Correct Answer

Distance

9) Motion is the process of changing _____.

Correct Answer

Blank 1: position

Answer Key with Questions

Lesson Check: Motion

10) Fill in the blanks using the available answer choices.

An object is in motion if its location _____ (Blank 1).

Blank 1 options

- stays constant
- changes

Correct Answer

changes