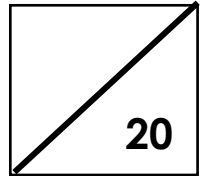


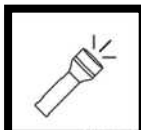




Name: _____ Grade 1: ____ Date: _____




Complete the table below (5)



<u>Heat</u>	<u>Light</u>	<u>Sound</u>
		
		
		
		
		

Circle the correct answer (5)

1. Which picture gives us **heat and light** energy?



2. **Loud sounds** - make a Circle ● **soft sounds** – make a square ■



Circle the correct answer (4)

1. _____ makes things work or change.

- a. Force
- b. Energy
- c. Matter

2. *Light* is a form of energy we can:

- a. See
- b. Hear
- c. Feel

3. Small vibrations makes:

- a. Loud sounds
- b. Soft sounds

4. How can you make a loud sound with this drum?

- a. Beat it *heavily*.
- b. Beat it *lightly*.
- c. Beat it *slowly*.



Draw objects that give us: (6)

Heat energy (2)	Light energy (2)	Sound eenergy (2)



Grade 1 States of Matter: Science Test









Name: _____

Total /25

Answer all Questions:

1.

Look at the items below and determine whether they are solids, liquids, or gases.

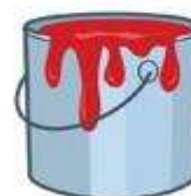
1. 	2. 	3. 	4. 
solid liquid gas	solid liquid gas	solid liquid gas	solid liquid gas
5. 	6. 	7. 	8. 
solid liquid gas	solid liquid gas	solid liquid gas	solid liquid gas

/8

2. Using the Word Box write the word that matches with the picture

/12

Gas, liquid, ice, log-solid , steam, air




Question 3:

Draw a line connecting the pictures on the left to the matching phase of matter on the right.



/3

Question 4: Label these things as either: Solid, Liquid or Gas



Liquid



Science Practice Test:



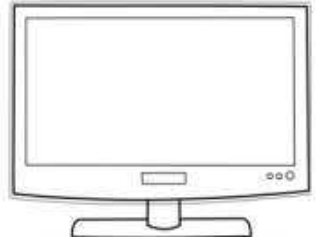
Motion-Energy & State of Matter

Grade 1:

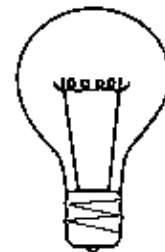

Name: _____

Please answer all the questions.

1. Tick what type of energy you see. 3 marks


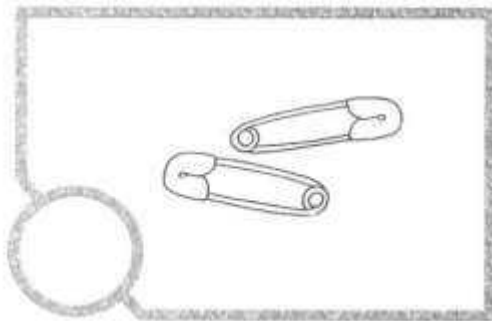
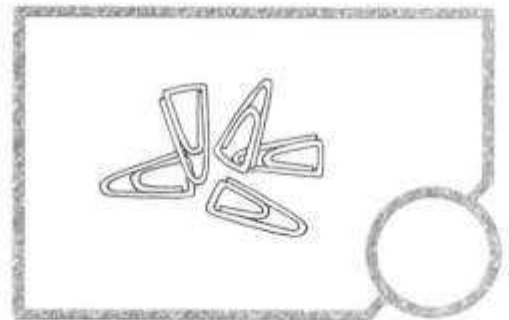
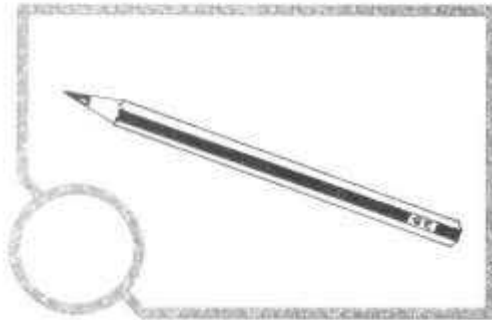
<p>Neon Sign</p>  <p>Natural or People Made?</p> <p>Light _____ Heat _____</p>	<p>Sun</p>  <p>Natural or People Made?</p> <p>Light _____ Heat _____</p>	<p>TV</p>  <p>Natural or People Made?</p> <p>Light _____ Heat _____</p>
--	--	---

2. Under each image, determine if the form is: Heat, Light or Sound.



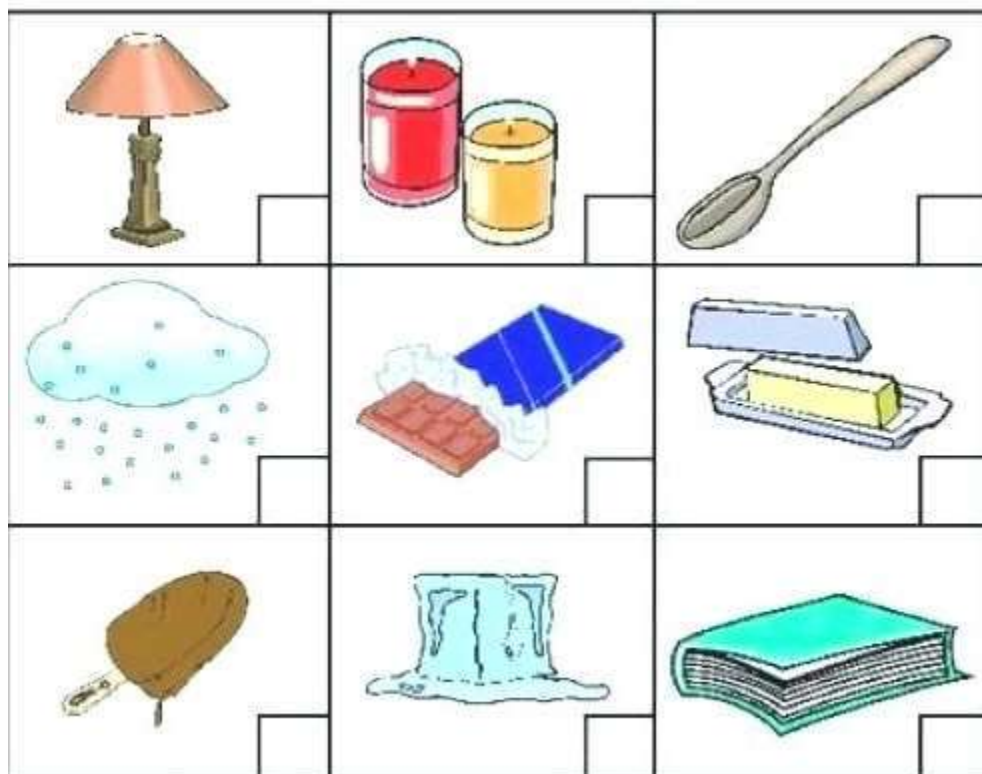
3.

Tick (✓) if the object can be attracted to a magnet.
Cross (✗) if the object cannot be attracted to a magnet.



4 Marks

4. What things melt when heated Tick or x



5. Fill in the blanks

Pull Push Speed Friction Position gravity

1. _____ or _____ can create movement.
2. _____ is how fast or slow something moves
3. _____ is when two objects rub together and reduce speed.
4. _____ where something is placed.
5. _____ is the force that pulls things to the ground.

Total Marks

/25