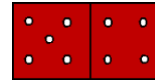


Q1: Choose the correct

1. The correct number sentence fact to find sum is?

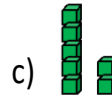
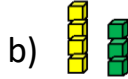
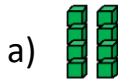


a) $4 + 4 = 8$

b) $5 + 5 = 10$

c) $4 + 5 = 9$

2. Choose the near double



3. Which addition sentence could help solve this problem?

$7 + 6 = \dots\dots\dots$

a) $10 + 7 = 17$

b) $10 + 6 = 16$

c) $10 + 3 = 13$

4. Find the sum

$9 + 5 + 1 = \dots\dots\dots$

a) 15

b) 13

c) 14

5. Khalid has 6 cars toy Mohamad has same number of cars.
How many cars they have in all?

a) 13

b) 11

c) 12

6. 9 butterfly in the tree, they all fly away.
How many butterflies are still in the tree?

a) 9

b) 0

c) 18


7. Mark the number sentence that uses doubles to subtract.

a) $8 - 4 = 4$

b) $8 - 8 = 0$

c) $8 - 2 = 6$

8. Find the missing addend



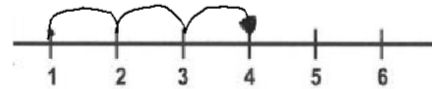
$8 + \square = 14$

a) 7

b) 6

c) 8

9. Use number line to find correct sentence.



a) Count on to subtract

b) Count back to subtract

c) Count on to add

10. Which number that shows the sum?

$8 - 5 = 3$

a) 3

b) 5

c) 8

11. Choose the group that skip counting .

a) 20, 22, 25, 27, 29

b) 20, 22, 24, 26, 28

c) 12, 17, 25, 30, 35

12. The missing number is


20, 30, ?, 50, 60

a) 55

b) 25

c) 40

13. Repeated addition to find the total



a) 15

b) 10

c) 20

14. The car has 4 tires, how many tires in 3 cars?



a) 10

b) 8

c) 12

15. Husam thinking an odd number between 24, 27 what is the number?

a) 25

b) 26

c) 29

16. How could you take apart to find the sum?

$$16 + 24 = \dots\dots\dots$$

a) $16 + 2 + 4$

b) $1 + 6 + 24$

c) $16 + 4 + 20$

17. There are 21 apples in the box, Khawlah put more 9 apples.
How many apples in the box?

a) 12

b) 30

c) 31

18. Choose the add sentence that need regroup.

a) $23 + 5$

b) $60 + 4$


c) $56 + 9$

19. Find the missing number

?	3
+ 1	4
6 7	

- a) 7 b) 5 c) 4

20. In the first drawer of huda's fridge 7 strawberry and 5 strawberry in second drawer.

Huda ate  . How many strawberry in the fridge ?

- a) 10 b) 14 c) 12

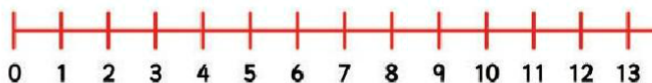
Q2: answer the question

21. Hesah has 3 stories , she bought more 8 story
How many stories with Hesah?

_____ ○ _____ ○ _____

..... Stories

22. Use the number line and count back to subtract

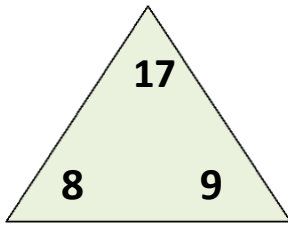


11 - 3 =

23. Write the equal addends that make the sum

	+		=	18
--	---	--	---	----

24. Complete the fact family



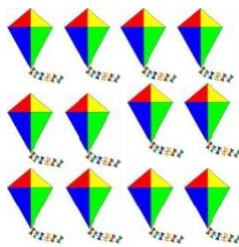
..... + =

..... + =

..... + =

..... + =

25. Describe array using a number sentence




..... + + =

..... Rows of Kite

26. Hind draw pineapple

Is the number of pineapples even or odd?

Explain:



.....
.....

27.

	6	7
+	2	8
<hr/>		

28.

	3	1
	2	5
+	1	2
<hr/>		

29.

	1	1
	1	4
+	3	6
	2	0
<hr/>		