

مهاراة الطرح

الصف الاول الاساسي

المعلمة : انتظار الدويكات


الاسم :

الشعبة :




الاسم :
الملاحظات :

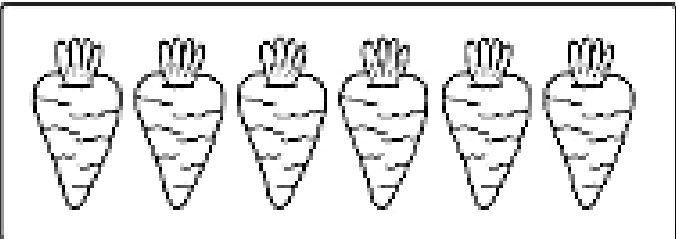
اشطب وأوجد الناتج



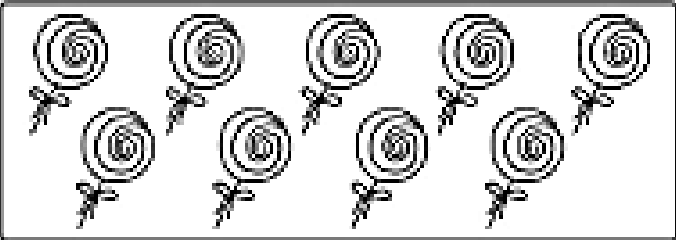
$$5 - 2 =$$



$$7 - 4 =$$



$$6 - 1 =$$



$$9 - 3 =$$




$$3 - 3 =$$

الاسم :
الملاحظات :

اشطب وأوجد الناتج

$8 - 2 =$




$4 - 3 =$



$5 - 2 =$



$7 - 4 =$




$3 - 1 =$

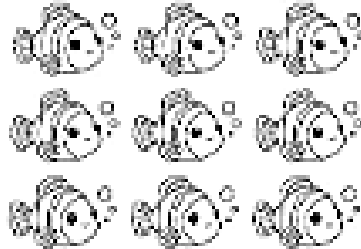


الاسم :
الملاحظات :


اشطب وأوجد الناتج



$$4 - 1 = \underline{\quad}$$




$$9 - 5 = \underline{\quad}$$




$$5 - 2 = \underline{\quad}$$




$$2 - 1 = \underline{\quad}$$



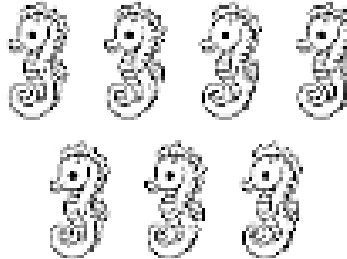
$$3 - 2 = \underline{\quad}$$




$$6 - 3 = \underline{\quad}$$



$$8 - 2 = \underline{\quad}$$



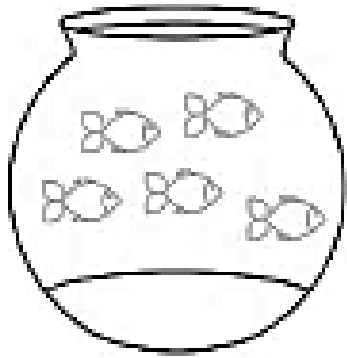
$$7 - 3 = \underline{\quad}$$



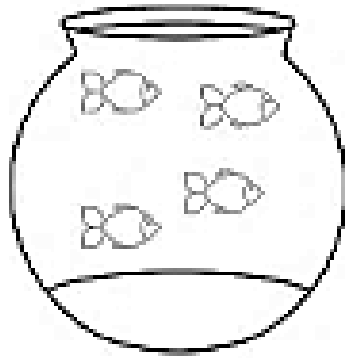
$$4 - 2 = \underline{\quad}$$

الاسم :
الملاحظات :

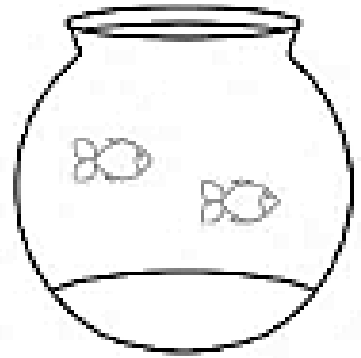
اشطب وأوجد الناتج



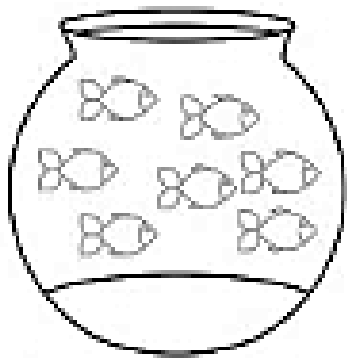
$$5 - 2 =$$



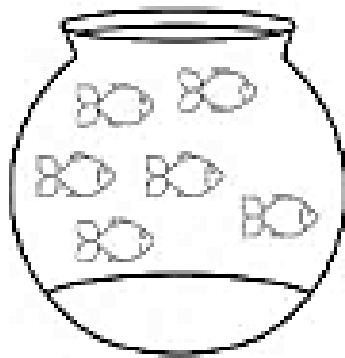
$$4 - 2 =$$



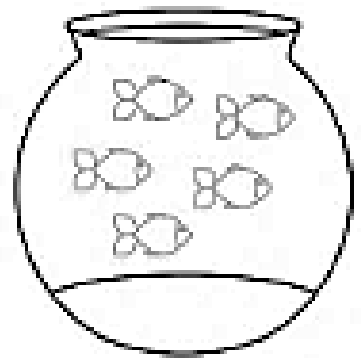
$$2 - 2 =$$



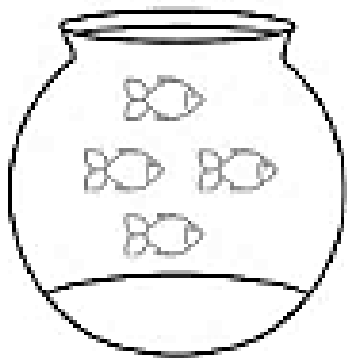
$$7 - 6 =$$



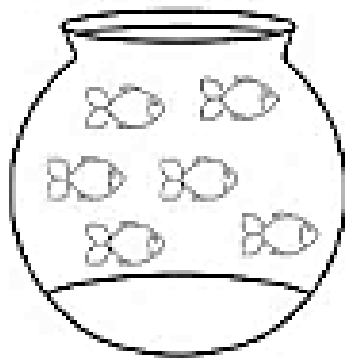
$$6 - 2 =$$



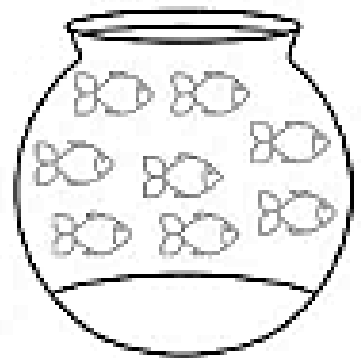
$$5 - 3 =$$



$$4 - 4 =$$



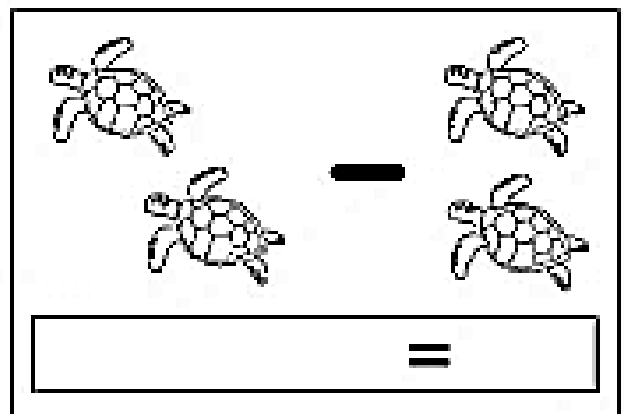
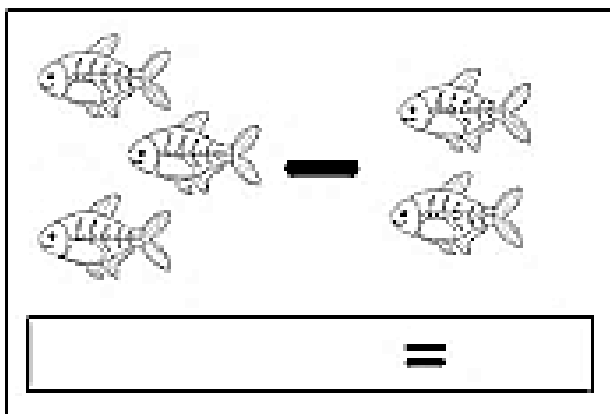
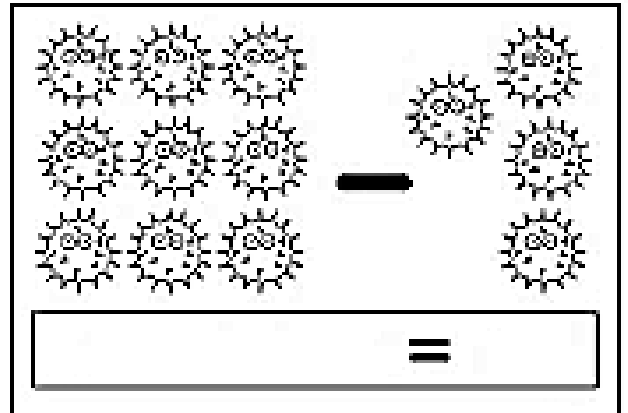
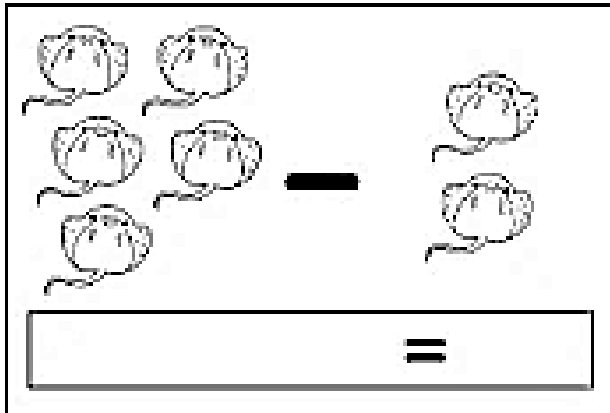
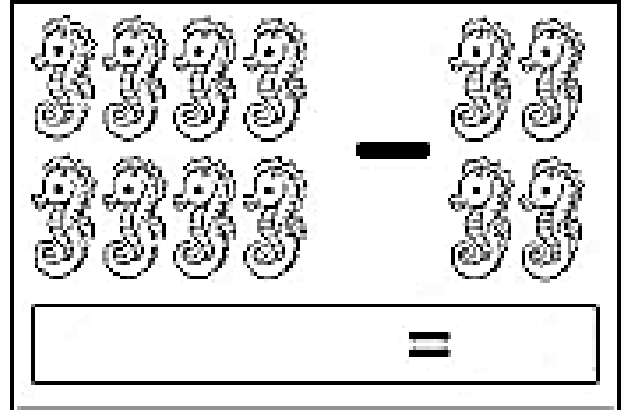
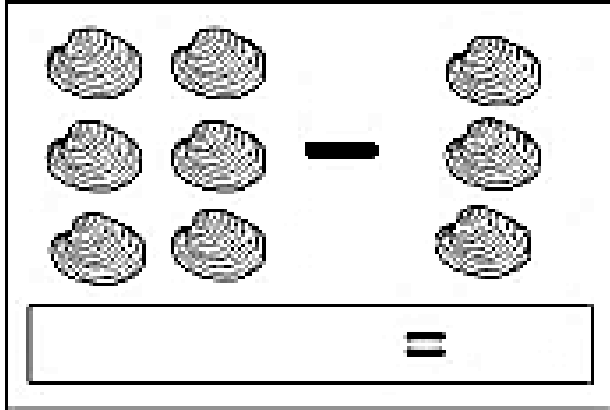
$$6 - 3 =$$



$$8 - 5 =$$

الاسم :
الملاحظات :

اطرح وأوجد الناتج

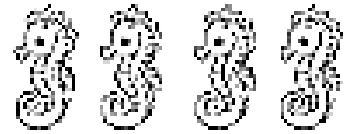


الاسم :
الملاحظات :

أوجد الناتج واكتبه ثم صل مع
الصورة المناسبة


$$4 - 2 =$$

•



$$7 - 3 =$$

•



$$6 - 1 =$$

•



$$3 - 2 =$$

•



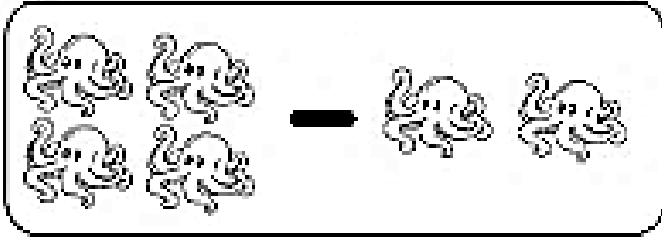
$$6 - 3 =$$

•

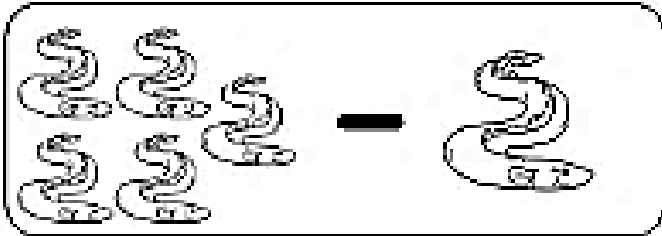


الاسم :
الملاحظات :

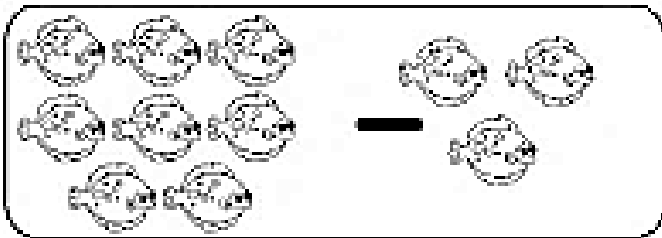
أوجد الناتج ثم صل مع العدد المناسب




• 5




• 2



• 3



• 4



• 1

الاسم :
الملاحظات :

$$\begin{array}{r} 9 \\ - 7 \\ \hline \end{array}$$
$$\begin{array}{r} 4 \\ - 3 \\ \hline \end{array}$$
$$\begin{array}{r} 6 \\ - 2 \\ \hline \end{array}$$
$$\begin{array}{r} 3 \\ - 1 \\ \hline \end{array}$$
$$\begin{array}{r} 8 \\ - 5 \\ \hline \end{array}$$

$$\begin{array}{r} 5 \\ - 2 \\ \hline \end{array}$$
$$\begin{array}{r} 6 \\ - 6 \\ \hline \end{array}$$
$$\begin{array}{r} 7 \\ - 4 \\ \hline \end{array}$$
$$\begin{array}{r} 9 \\ - 3 \\ \hline \end{array}$$
$$\begin{array}{r} 2 \\ - 0 \\ \hline \end{array}$$

$$\begin{array}{r} 3 \\ - 2 \\ \hline \end{array}$$
$$\begin{array}{r} 9 \\ - 4 \\ \hline \end{array}$$
$$\begin{array}{r} 7 \\ - 3 \\ \hline \end{array}$$
$$\begin{array}{r} 4 \\ - 2 \\ \hline \end{array}$$
$$\begin{array}{r} 6 \\ - 4 \\ \hline \end{array}$$

$$\begin{array}{r} 8 \\ - 6 \\ \hline \end{array}$$
$$\begin{array}{r} 9 \\ - 2 \\ \hline \end{array}$$
$$\begin{array}{r} 6 \\ - 3 \\ \hline \end{array}$$
$$\begin{array}{r} 9 \\ - 6 \\ \hline \end{array}$$
$$\begin{array}{r} 7 \\ - 5 \\ \hline \end{array}$$

$$\begin{array}{r} 8 \\ - 8 \\ \hline \end{array}$$
$$\begin{array}{r} 5 \\ - 4 \\ \hline \end{array}$$
$$\begin{array}{r} 7 \\ - 6 \\ \hline \end{array}$$
$$\begin{array}{r} 7 \\ - 2 \\ \hline \end{array}$$
$$\begin{array}{r} 5 \\ - 3 \\ \hline \end{array}$$

الاسم :
الملاحظات :

$$\begin{array}{r} 9 \\ - 1 \\ \hline \end{array}$$
$$\begin{array}{r} 7 \\ - 2 \\ \hline \end{array}$$
$$\begin{array}{r} 6 \\ - 1 \\ \hline \end{array}$$
$$\begin{array}{r} 2 \\ - 2 \\ \hline \end{array}$$
$$\begin{array}{r} 5 \\ - 1 \\ \hline \end{array}$$

$$\begin{array}{r} 8 \\ - 2 \\ \hline \end{array}$$
$$\begin{array}{r} 6 \\ - 3 \\ \hline \end{array}$$
$$\begin{array}{r} 8 \\ - 7 \\ \hline \end{array}$$
$$\begin{array}{r} 9 \\ - 6 \\ \hline \end{array}$$
$$\begin{array}{r} 7 \\ - 6 \\ \hline \end{array}$$

$$\begin{array}{r} 3 \\ - 2 \\ \hline \end{array}$$
$$\begin{array}{r} 9 \\ - 5 \\ \hline \end{array}$$
$$\begin{array}{r} 6 \\ - 2 \\ \hline \end{array}$$
$$\begin{array}{r} 4 \\ - 1 \\ \hline \end{array}$$
$$\begin{array}{r} 2 \\ - 0 \\ \hline \end{array}$$

$$\begin{array}{r} 8 \\ - 5 \\ \hline \end{array}$$
$$\begin{array}{r} 7 \\ - 2 \\ \hline \end{array}$$
$$\begin{array}{r} 5 \\ - 4 \\ \hline \end{array}$$
$$\begin{array}{r} 4 \\ - 1 \\ \hline \end{array}$$
$$\begin{array}{r} 9 \\ - 3 \\ \hline \end{array}$$

$$\begin{array}{r} 9 \\ - 8 \\ \hline \end{array}$$
$$\begin{array}{r} 8 \\ - 4 \\ \hline \end{array}$$
$$\begin{array}{r} 7 \\ - 4 \\ \hline \end{array}$$
$$\begin{array}{r} 9 \\ - 2 \\ \hline \end{array}$$
$$\begin{array}{r} 5 \\ - 0 \\ \hline \end{array}$$

الاسم :
الملاحظات :

$$\begin{array}{r} 9 \\ - 3 \\ \hline \end{array}$$
$$\begin{array}{r} 7 \\ - 5 \\ \hline \end{array}$$
$$\begin{array}{r} 6 \\ - 4 \\ \hline \end{array}$$
$$\begin{array}{r} 2 \\ - 2 \\ \hline \end{array}$$
$$\begin{array}{r} 5 \\ - 2 \\ \hline \end{array}$$

$$\begin{array}{r} 8 \\ - 2 \\ \hline \end{array}$$
$$\begin{array}{r} 5 \\ - 3 \\ \hline \end{array}$$
$$\begin{array}{r} 9 \\ - 0 \\ \hline \end{array}$$
$$\begin{array}{r} 8 \\ - 6 \\ \hline \end{array}$$
$$\begin{array}{r} 6 \\ - 6 \\ \hline \end{array}$$

$$\begin{array}{r} 3 \\ - 1 \\ \hline \end{array}$$
$$\begin{array}{r} 9 \\ - 7 \\ \hline \end{array}$$
$$\begin{array}{r} 8 \\ - 3 \\ \hline \end{array}$$
$$\begin{array}{r} 4 \\ - 1 \\ \hline \end{array}$$
$$\begin{array}{r} 7 \\ - 4 \\ \hline \end{array}$$

$$\begin{array}{r} 8 \\ - 6 \\ \hline \end{array}$$
$$\begin{array}{r} 9 \\ - 2 \\ \hline \end{array}$$
$$\begin{array}{r} 6 \\ - 3 \\ \hline \end{array}$$
$$\begin{array}{r} 9 \\ - 6 \\ \hline \end{array}$$
$$\begin{array}{r} 7 \\ - 5 \\ \hline \end{array}$$

$$\begin{array}{r} 8 \\ - 8 \\ \hline \end{array}$$
$$\begin{array}{r} 5 \\ - 4 \\ \hline \end{array}$$
$$\begin{array}{r} 7 \\ - 6 \\ \hline \end{array}$$
$$\begin{array}{r} 7 \\ - 2 \\ \hline \end{array}$$
$$\begin{array}{r} 5 \\ - 3 \\ \hline \end{array}$$

الاسم :
الملاحظات :

$$\begin{array}{r} 8 \\ - 4 \\ \hline \end{array}$$
$$\begin{array}{r} 6 \\ - 3 \\ \hline \end{array}$$
$$\begin{array}{r} 4 \\ - 2 \\ \hline \end{array}$$
$$\begin{array}{r} 2 \\ - 1 \\ \hline \end{array}$$
$$\begin{array}{r} 10 \\ - 5 \\ \hline \end{array}$$

$$\begin{array}{r} 5 \\ - 3 \\ \hline \end{array}$$
$$\begin{array}{r} 7 \\ - 4 \\ \hline \end{array}$$
$$\begin{array}{r} 8 \\ - 5 \\ \hline \end{array}$$
$$\begin{array}{r} 9 \\ - 6 \\ \hline \end{array}$$
$$\begin{array}{r} 2 \\ - 0 \\ \hline \end{array}$$

$$\begin{array}{r} 1 \\ - 1 \\ \hline \end{array}$$
$$\begin{array}{r} 1 \\ - 0 \\ \hline \end{array}$$
$$\begin{array}{r} 9 \\ - 9 \\ \hline \end{array}$$
$$\begin{array}{r} 9 \\ - 0 \\ \hline \end{array}$$
$$\begin{array}{r} 6 \\ - 6 \\ \hline \end{array}$$

$$\begin{array}{r} 8 \\ - 8 \\ \hline \end{array}$$
$$\begin{array}{r} 8 \\ - 0 \\ \hline \end{array}$$
$$\begin{array}{r} 6 \\ - 0 \\ \hline \end{array}$$
$$\begin{array}{r} 8 \\ - 6 \\ \hline \end{array}$$
$$\begin{array}{r} 5 \\ - 5 \\ \hline \end{array}$$

$$\begin{array}{r} 9 \\ - 8 \\ \hline \end{array}$$
$$\begin{array}{r} 7 \\ - 4 \\ \hline \end{array}$$
$$\begin{array}{r} 10 \\ - 6 \\ \hline \end{array}$$
$$\begin{array}{r} 9 \\ - 2 \\ \hline \end{array}$$
$$\begin{array}{r} 8 \\ - 3 \\ \hline \end{array}$$

الاسم :
الملاحظات :

$10 - 9 = \underline{\hspace{2cm}}$

$9 - 3 = \underline{\hspace{2cm}}$

$8 - 2 = \underline{\hspace{2cm}}$

$5 - 2 = \underline{\hspace{2cm}}$

$6 - 3 = \underline{\hspace{2cm}}$

$7 - 3 = \underline{\hspace{2cm}}$

$8 - 6 = \underline{\hspace{2cm}}$

$8 - 4 = \underline{\hspace{2cm}}$

$8 - 8 = \underline{\hspace{2cm}}$

$7 - 5 = \underline{\hspace{2cm}}$

$10 - 8 = \underline{\hspace{2cm}}$

$3 - 2 = \underline{\hspace{2cm}}$

$3 - 1 = \underline{\hspace{2cm}}$

$6 - 2 = \underline{\hspace{2cm}}$

$5 - 5 = \underline{\hspace{2cm}}$

$8 - 7 = \underline{\hspace{2cm}}$

$7 - 6 = \underline{\hspace{2cm}}$

$6 - 4 = \underline{\hspace{2cm}}$

الاسم :
الملاحظات :

$8 - 6 = \underline{\quad}$

$9 - 6 = \underline{\quad}$

$9 - 5 = \underline{\quad}$

$6 - 5 = \underline{\quad}$

$4 - 4 = \underline{\quad}$

$3 - 3 = \underline{\quad}$

$2 - 1 = \underline{\quad}$

$5 - 4 = \underline{\quad}$

$9 - 4 = \underline{\quad}$

$9 - 8 = \underline{\quad}$

$10 - 5 = \underline{\quad}$

$5 - 4 = \underline{\quad}$

$6 - 6 = \underline{\quad}$

$7 - 3 = \underline{\quad}$

$8 - 1 = \underline{\quad}$

$8 - 5 = \underline{\quad}$

$6 - 5 = \underline{\quad}$

$7 - 7 = \underline{\quad}$